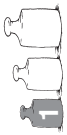


Name: _____


Datum: _____



Die 1er-Einmaleinsreihe

1

Welche Malaufgaben der 1er-Reihe sind abgebildet?



$$\square \cdot 1$$



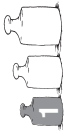
$$\square \cdot 1$$



$$\square \cdot 1$$

Name: _____

Datum: _____



Die 1er-Einmaleinsreihe

2

Verbinde die Aufgaben!



$$1 = 2 \cdot 1$$

$$1 + 1 = 3 \cdot 1$$

$$1 + 1 + 1 = 4 \cdot 1$$

$$1 + 1 + 1 + 1 = 1 \cdot 1$$

$$1 + 1 + 1 + 1 + 1 = 6 \cdot 1$$

$$1 + 1 + 1 + 1 + 1 + 1 = 5 \cdot 1$$

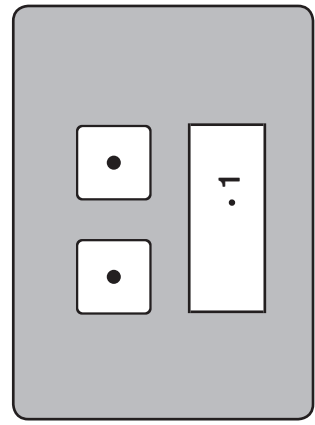
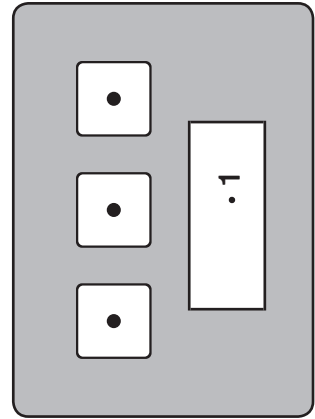
$$1 + 1 + 1 + 1 + 1 + 1 + 1 = 8 \cdot 1$$

$$1 + 1 + 1 + 1 + 1 + 1 + 1 + 1 = 7 \cdot 1$$

$$1 + 1 + 1 + 1 + 1 + 1 + 1 + 1 + 1 = 10 \cdot 1$$

$$1 + 1 + 1 + 1 + 1 + 1 + 1 + 1 + 1 + 1 + 1 = 9 \cdot 1$$







Wie heißen die Malaufgaben der 1er-Reihe?



Name: _____ Datum: _____







Die 1er-Einmaleinsreihe 4

Schreibe die Plusaufgabe und die Malaufgabe!


1	+		=	
3	·	1	=	

1	+		=	
	·	1	=	



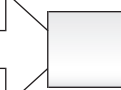









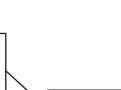
1	+		=	
	·	1	=	



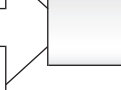
1	+		=	
	·	1	=	



Fülle die Lücken!

 ·  = 



 ·  = 



 ·  = 



Name: _____ Datum: _____



Die 1er-Einmaleinsreihe 3



Setze die richtigen Zahlen ein!











 = $1 \cdot 1 =$ 

 = $2 \cdot 1 =$ 

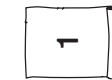





 = $3 \cdot 1 =$ 








 = $4 \cdot 1 =$ 

 = $5 \cdot 1 =$ 













Trage alle Zahlen der 1er-Reihe ein!

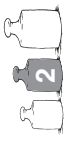
Kreise alle Zahlen der 1er-Reihe ein!



1	2	3	4	5	6	7	8	9	10
---	---	---	---	---	---	---	---	---	----

Name: _____

Datum: _____



Die 1er-Einmaleinsreihe

5

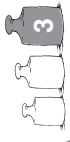
Verbinde die Aufgaben mit den richtigen Lösungen!

3 • 1
10 • 1
5 • 1
8 • 1
4 • 1
6 • 1

5
3
4
10
8
6

Name: _____

Datum: _____




Die 1er-Einmaleinsreihe

6





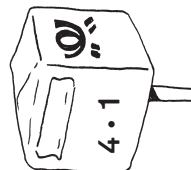
Fülle die Lücken!

• 1 = 6
 • 1 = 3
 • 1 = 4
 • 1 = 7
 • 1 = 10



• 1 = 5
 • 1 = 0
 • 1 = 8
 • 1 = 1
 • 1 = 3

Welcher Brief gehört in welchen Briefkasten? Verbinde!



9

4

0

8

6

Löse die Rechenmauern!

10
• 1
1

5
• 1
1



7
• 1
1

4
• 1
1