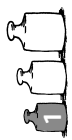


Name: _____

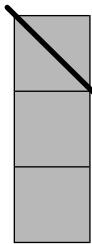
Datum: _____



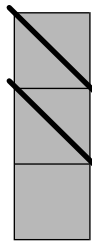
Minusrechnen im Zahlenraum bis 5

5

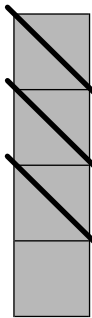
Räuber Kalle klaut Goldblöcke.
Wie viele lässt er jeweils liegen?



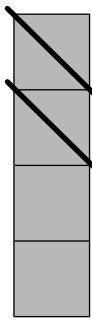
$$\begin{array}{|c|} \hline 3 \\ \hline \end{array} - \begin{array}{|c|} \hline 1 \\ \hline \end{array} = \begin{array}{|c|} \hline \\ \hline \end{array}$$



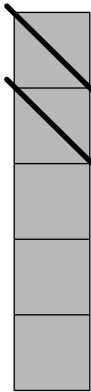

$$\begin{array}{|c|} \hline 3 \\ \hline \end{array} - \begin{array}{|c|} \hline 2 \\ \hline \end{array} = \begin{array}{|c|} \hline \\ \hline \end{array}$$




$$\begin{array}{|c|} \hline 4 \\ \hline \end{array} - \begin{array}{|c|} \hline 3 \\ \hline \end{array} = \begin{array}{|c|} \hline \\ \hline \end{array}$$



$$\begin{array}{|c|} \hline 4 \\ \hline \end{array} - \begin{array}{|c|} \hline 2 \\ \hline \end{array} = \begin{array}{|c|} \hline \\ \hline \end{array}$$



$$\begin{array}{|c|} \hline 5 \\ \hline \end{array} - \begin{array}{|c|} \hline 2 \\ \hline \end{array} = \begin{array}{|c|} \hline \\ \hline \end{array}$$



$$\begin{array}{|c|} \hline 5 \\ \hline \end{array} - \begin{array}{|c|} \hline 1 \\ \hline \end{array} = \begin{array}{|c|} \hline \\ \hline \end{array}$$

Name: _____

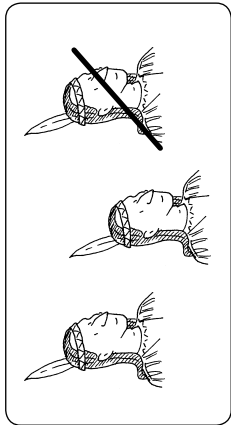
Datum: _____



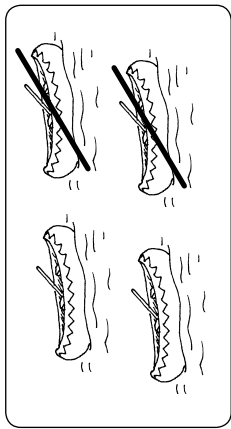
Minusrechnen im Zahlenraum bis 5

6

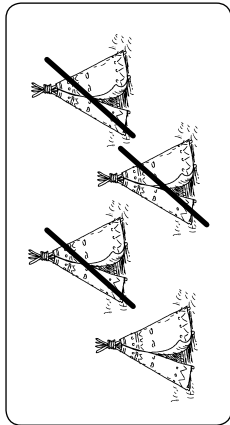
Schreibe die Minusaufgaben und rechne sie aus.



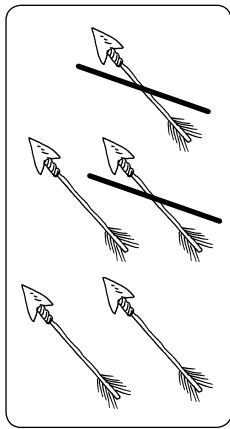
$$\begin{array}{|c|} \hline 3 \\ \hline \end{array} - \begin{array}{|c|} \hline 1 \\ \hline \end{array} = \begin{array}{|c|} \hline \\ \hline \end{array}$$



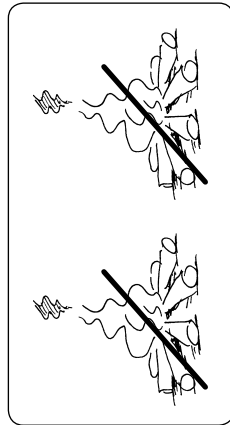
$$\begin{array}{|c|} \hline 4 \\ \hline \end{array} - \begin{array}{|c|} \hline 2 \\ \hline \end{array} = \begin{array}{|c|} \hline \\ \hline \end{array}$$




$$\begin{array}{|c|} \hline 4 \\ \hline \end{array} - \begin{array}{|c|} \hline \\ \hline \end{array} = \begin{array}{|c|} \hline \\ \hline \end{array}$$



$$\begin{array}{|c|} \hline \\ \hline \end{array} - \begin{array}{|c|} \hline \\ \hline \end{array} = \begin{array}{|c|} \hline \\ \hline \end{array}$$



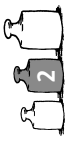
$$\begin{array}{|c|} \hline \\ \hline \end{array} - \begin{array}{|c|} \hline \\ \hline \end{array} = \begin{array}{|c|} \hline \\ \hline \end{array}$$



$$\begin{array}{|c|} \hline \\ \hline \end{array} - \begin{array}{|c|} \hline \\ \hline \end{array} = \begin{array}{|c|} \hline \\ \hline \end{array}$$

Name: _____

Datum: _____



Minusrechnen im Zahlenraum bis 10

10

Rechne aus. Trage den richtigen Buchstaben unten ein.

1. $8 - 6 =$

3. $7 - 2 =$

2. $6 - 5 =$

4. $9 - 7 =$

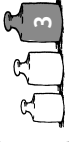
Lösung:

1	2	3	4



Name: _____

Datum: _____



Minusrechnen im Zahlenraum bis 10

11

Größer \ominus , kleiner \otimes oder gleich \ominus ?

6 - 3 4
 10 - 7 3
 4 - 4 4
 8 - 6 1
 7 - 5 2




9 - 0 0
 6 - 5 1
 10 - 4 6
 7 - 3 5
 8 - 4 4

Rechne aus. Überprüfe deine Ergebnisse.


$6 - 4 =$ _____
 $8 - 3 =$ _____
 $9 - 8 =$ _____
 $7 - 0 =$ _____

$10 - 7 =$ _____
 $5 - 5 =$ _____
 $8 - 6 =$ _____
 $9 - 3 =$ _____



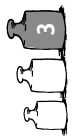
Löse die Rechenkettten.

$8 - 2 - 3 =$
 $10 - 4 - 5 =$
 $7 - 1 - 4 =$
 $10 - 2 - 0 - 6 =$
 $9 - 3 - 3 - 3 =$



Name: _____





Datum: _____



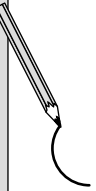











Minusrechnen mit Geld im Zahlenraum bis 10

11

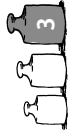
Male das Restgeld. 

			
2 ct	3 ct	4 ct	5 ct

Bezahlt mit:	Kauft ein:	Restgeld:
		
		
		
		
		

Name: _____

Datum: _____















Minusrechnen mit Geld im Zahlenraum bis 10

12

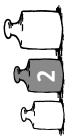
Wie viel € bekommst du zurück? 



Du kaufst:	Du bezahlst mit:	Du bekommst zurück:
		10 € - ____ € - ____ € = ____ €
		10 € - ____ € - ____ € = ____ €
		____ € - ____ € - ____ € = ____ €
		____ € - ____ € - ____ € = ____ €
		____ € - ____ € - ____ € = ____ €
		____ € - ____ € - ____ € = ____ €

Name: _____

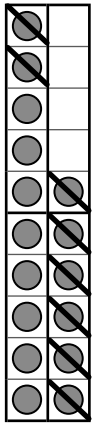
Datum: _____



Minusrechnen im Zahlenraum bis 20 mit geführter 10er-Unterschreitung

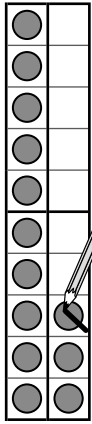
7

Zuerst zur 10! Streiche durch.



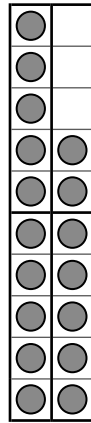

$$16 - 8 = \underline{\quad}$$

$$16 - 6 - \underline{\quad} = \underline{\quad}$$



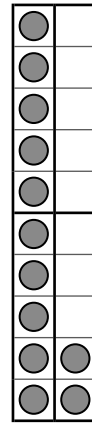
$$13 - 7 = \underline{\quad}$$

$$13 - \underline{\quad} - \underline{\quad} = \underline{\quad}$$



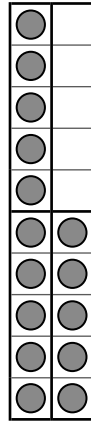
$$17 - 9 = \underline{\quad}$$

$$17 - \underline{\quad} - \underline{\quad} = \underline{\quad}$$



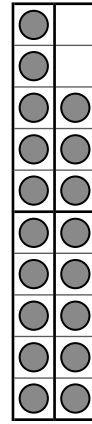
$$12 - 7 = \underline{\quad}$$

$$12 - \underline{\quad} - \underline{\quad} = \underline{\quad}$$



$$15 - 8 = \underline{\quad}$$

$$15 - \underline{\quad} - \underline{\quad} = \underline{\quad}$$



$$18 - 9 = \underline{\quad}$$

$$18 - \underline{\quad} - \underline{\quad} = \underline{\quad}$$

Name: _____

Datum: _____



Minusrechnen im Zahlenraum bis 20 mit geführter 10er-Unterschreitung

8

Zuerst zur 10!

